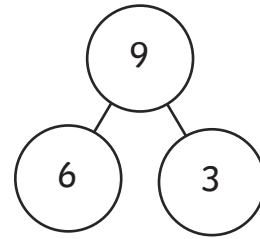
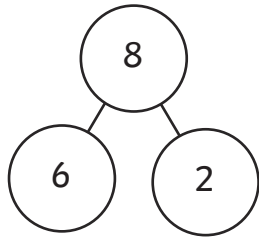


Addition and Subtraction Fact Families to 10

For each set of numbers, write four different addition and subtraction facts.



$$\square + \square = \square$$

$$\square + \square = \square$$

$$\square + \square = \square$$

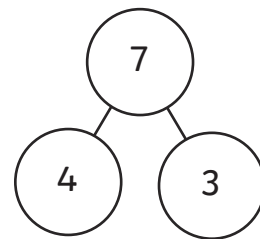
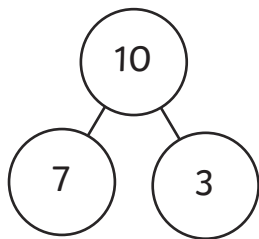
$$\square + \square = \square$$

$$\square - \square = \square$$

$$\square - \square = \square$$

$$\square - \square = \square$$

$$\square - \square = \square$$



$$\square + \square = \square$$

$$\square + \square = \square$$

$$\square + \square = \square$$

$$\square + \square = \square$$

$$\square - \square = \square$$

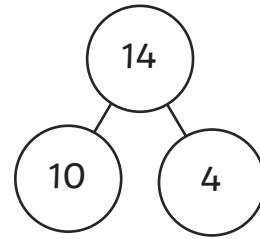
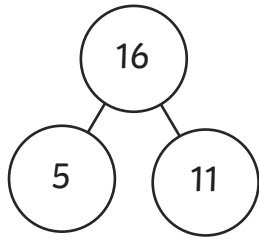
$$\square - \square = \square$$

$$\square - \square = \square$$

$$\square - \square = \square$$

Addition and Subtraction Fact Families to 10

For each set of numbers, write four different addition and subtraction facts.



$$\square + \square = \square$$

$$\square + \square = \square$$

$$\square + \square = \square$$

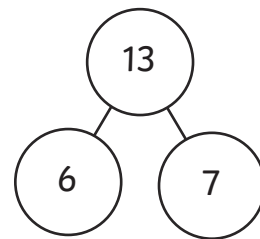
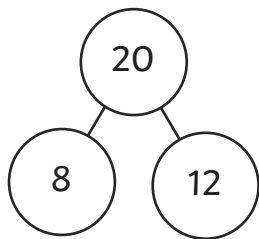
$$\square + \square = \square$$

$$\square - \square = \square$$

$$\square - \square = \square$$

$$\square - \square = \square$$

$$\square - \square = \square$$



$$\square + \square = \square$$

$$\square + \square = \square$$

$$\square + \square = \square$$

$$\square + \square = \square$$

$$\square - \square = \square$$

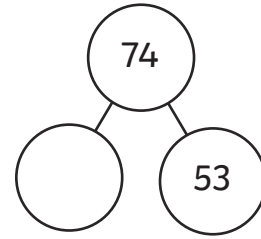
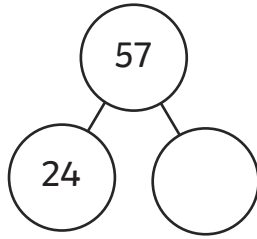
$$\square - \square = \square$$

$$\square - \square = \square$$

$$\square - \square = \square$$

Addition and Subtraction Fact Families to 10

For each set of numbers, write four different addition and subtraction facts.



+

=

+

=

+

=

+

=

-

=

-

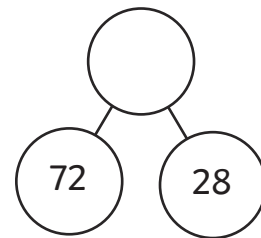
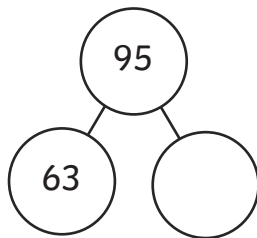
=

-

=

-

=



+

=

+

=

+

=

+

=

-

=

-

=

-

=

-

=

Addition and Subtraction Fact Families to 10

For each set of numbers, write four different addition and subtraction facts.

8	
6	2

$$\square + \square = \square$$

$$\square + \square = \square$$

$$\square - \square = \square$$

$$\square - \square = \square$$

9	
3	6

$$\square + \square = \square$$

$$\square + \square = \square$$

$$\square - \square = \square$$

$$\square - \square = \square$$

10	
7	3

$$\square + \square = \square$$

$$\square + \square = \square$$

$$\square - \square = \square$$

$$\square - \square = \square$$

7	
4	3

$$\square + \square = \square$$

$$\square + \square = \square$$

$$\square - \square = \square$$

$$\square - \square = \square$$

Addition and Subtraction Fact Families to 10

For each set of numbers, write four different addition and subtraction facts.

16	
5	11

$$\square + \square = \square$$

$$\square + \square = \square$$

$$\square - \square = \square$$

$$\square - \square = \square$$

14	
10	4

$$\square + \square = \square$$

$$\square + \square = \square$$

$$\square - \square = \square$$

$$\square - \square = \square$$

20	
8	12

$$\square + \square = \square$$

$$\square + \square = \square$$

$$\square - \square = \square$$

$$\square - \square = \square$$

13	
6	7

$$\square + \square = \square$$

$$\square + \square = \square$$

$$\square - \square = \square$$

$$\square - \square = \square$$

Addition and Subtraction Fact Families to 10

For each set of numbers, write four different addition and subtraction facts.

57	
24	

$$\square + \square = \square$$

$$\square + \square = \square$$

$$\square - \square = \square$$

$$\square - \square = \square$$

74	
	53

$$\square + \square = \square$$

$$\square + \square = \square$$

$$\square - \square = \square$$

$$\square - \square = \square$$

95	
63	

$$\square + \square = \square$$

$$\square + \square = \square$$

$$\square - \square = \square$$

$$\square - \square = \square$$

72	28

$$\square + \square = \square$$

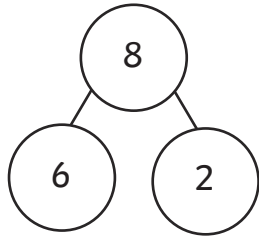
$$\square + \square = \square$$

$$\square - \square = \square$$

$$\square - \square = \square$$

Addition and Subtraction Fact Families to 10 - Answers

For each set of numbers, write four different addition and subtraction facts.

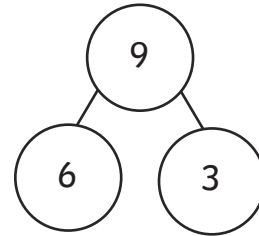


$$\boxed{6} + \boxed{2} = \boxed{8}$$

$$\boxed{2} + \boxed{6} = \boxed{8}$$

$$\boxed{8} - \boxed{6} = \boxed{2}$$

$$\boxed{8} - \boxed{2} = \boxed{6}$$

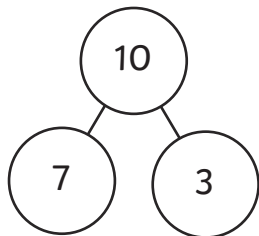


$$\boxed{6} + \boxed{3} = \boxed{9}$$

$$\boxed{3} + \boxed{6} = \boxed{9}$$

$$\boxed{9} - \boxed{3} = \boxed{6}$$

$$\boxed{9} - \boxed{6} = \boxed{3}$$

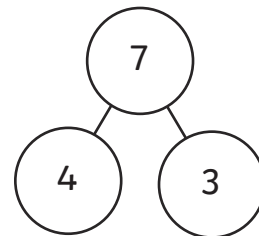


$$\boxed{7} + \boxed{3} = \boxed{10}$$

$$\boxed{3} + \boxed{7} = \boxed{10}$$

$$\boxed{10} - \boxed{7} = \boxed{3}$$

$$\boxed{10} - \boxed{3} = \boxed{7}$$



$$\boxed{4} + \boxed{3} = \boxed{7}$$

$$\boxed{3} + \boxed{4} = \boxed{7}$$

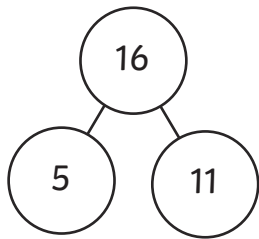
$$\boxed{7} - \boxed{3} = \boxed{4}$$

$$\boxed{7} - \boxed{4} = \boxed{3}$$

Addition and Subtraction

Fact Families to 10 - Answers

For each set of numbers, write four different addition and subtraction facts.

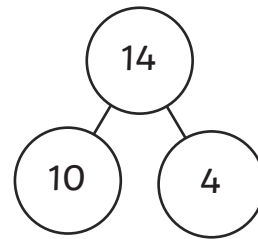


$$\boxed{5} + \boxed{11} = \boxed{16}$$

$$\boxed{11} + \boxed{5} = \boxed{16}$$

$$\boxed{16} - \boxed{5} = \boxed{11}$$

$$\boxed{16} - \boxed{11} = \boxed{5}$$

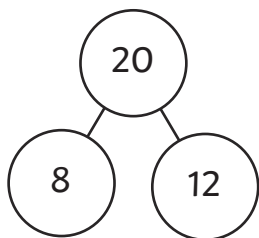


$$\boxed{10} + \boxed{4} = \boxed{14}$$

$$\boxed{4} + \boxed{10} = \boxed{14}$$

$$\boxed{14} - \boxed{4} = \boxed{10}$$

$$\boxed{14} - \boxed{10} = \boxed{4}$$

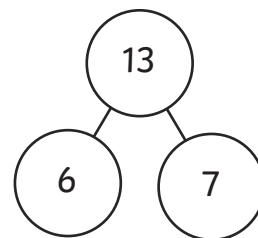


$$\boxed{8} + \boxed{12} = \boxed{20}$$

$$\boxed{12} + \boxed{8} = \boxed{20}$$

$$\boxed{20} - \boxed{8} = \boxed{12}$$

$$\boxed{20} - \boxed{12} = \boxed{8}$$



$$\boxed{6} + \boxed{7} = \boxed{13}$$

$$\boxed{7} + \boxed{6} = \boxed{13}$$

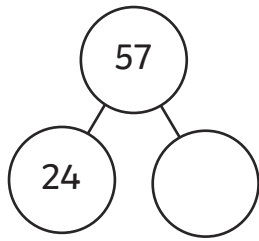
$$\boxed{13} - \boxed{6} = \boxed{7}$$

$$\boxed{13} - \boxed{7} = \boxed{6}$$

Addition and Subtraction

Fact Families to 10 - Answers

For each set of numbers, write four different addition and subtraction facts.

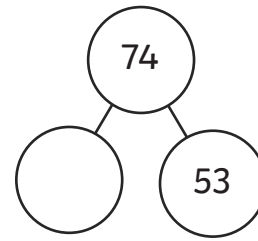


$$\boxed{24} + \boxed{33} = \boxed{57}$$

$$\boxed{33} + \boxed{24} = \boxed{57}$$

$$\boxed{57} - \boxed{24} = \boxed{33}$$

$$\boxed{57} - \boxed{33} = \boxed{24}$$

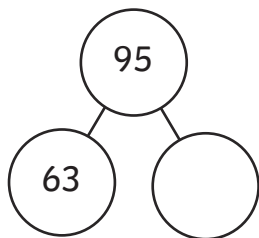


$$\boxed{21} + \boxed{53} = \boxed{74}$$

$$\boxed{21} + \boxed{53} = \boxed{74}$$

$$\boxed{74} - \boxed{21} = \boxed{53}$$

$$\boxed{74} - \boxed{52} = \boxed{21}$$

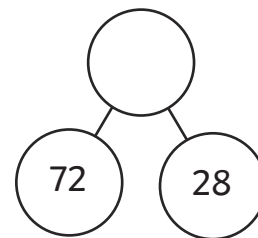


$$\boxed{63} + \boxed{32} = \boxed{95}$$

$$\boxed{32} + \boxed{62} = \boxed{95}$$

$$\boxed{95} - \boxed{63} = \boxed{32}$$

$$\boxed{95} - \boxed{32} = \boxed{63}$$



$$\boxed{72} + \boxed{28} = \boxed{100}$$

$$\boxed{28} + \boxed{72} = \boxed{100}$$

$$\boxed{100} - \boxed{72} = \boxed{28}$$

$$\boxed{100} - \boxed{28} = \boxed{72}$$

Addition and Subtraction

Fact Families to 10 - Answers

For each set of numbers, write four different addition and subtraction facts.

8	
6	2

$$\boxed{6} + \boxed{2} = \boxed{8}$$

$$\boxed{2} + \boxed{6} = \boxed{8}$$

$$\boxed{8} - \boxed{6} = \boxed{2}$$

$$\boxed{8} - \boxed{2} = \boxed{6}$$

9	
3	6

$$\boxed{6} + \boxed{3} = \boxed{9}$$

$$\boxed{3} + \boxed{6} = \boxed{9}$$

$$\boxed{9} - \boxed{3} = \boxed{6}$$

$$\boxed{9} - \boxed{6} = \boxed{3}$$

10	
7	3

$$\boxed{7} + \boxed{3} = \boxed{10}$$

$$\boxed{3} + \boxed{7} = \boxed{10}$$

$$\boxed{10} - \boxed{7} = \boxed{3}$$

$$\boxed{10} - \boxed{3} = \boxed{7}$$

7	
4	3

$$\boxed{4} + \boxed{3} = \boxed{7}$$

$$\boxed{3} + \boxed{4} = \boxed{7}$$

$$\boxed{7} - \boxed{3} = \boxed{4}$$

$$\boxed{7} - \boxed{4} = \boxed{3}$$

Addition and Subtraction

Fact Families to 10 - Answers

For each set of numbers, write four different addition and subtraction facts.

16	
5	11

$$\boxed{5} + \boxed{11} = \boxed{16}$$

$$\boxed{11} + \boxed{5} = \boxed{16}$$

$$\boxed{16} - \boxed{5} = \boxed{11}$$

$$\boxed{16} - \boxed{11} = \boxed{5}$$

14	
10	4

$$\boxed{10} + \boxed{4} = \boxed{14}$$

$$\boxed{4} + \boxed{10} = \boxed{14}$$

$$\boxed{14} - \boxed{4} = \boxed{10}$$

$$\boxed{14} - \boxed{10} = \boxed{4}$$

20	
8	12

$$\boxed{8} + \boxed{12} = \boxed{20}$$

$$\boxed{12} + \boxed{8} = \boxed{20}$$

$$\boxed{20} - \boxed{8} = \boxed{12}$$

$$\boxed{20} - \boxed{12} = \boxed{8}$$

13	
6	7

$$\boxed{6} + \boxed{7} = \boxed{13}$$

$$\boxed{7} + \boxed{6} = \boxed{13}$$

$$\boxed{13} - \boxed{6} = \boxed{7}$$

$$\boxed{13} - \boxed{7} = \boxed{6}$$

Addition and Subtraction

Fact Families to 10 - **Answers**

For each set of numbers, write four different addition and subtraction facts.

57	
24	

$$\boxed{24} + \boxed{33} = \boxed{57}$$

$$\boxed{33} + \boxed{24} = \boxed{57}$$

$$\boxed{57} - \boxed{24} = \boxed{33}$$

$$\boxed{57} - \boxed{33} = \boxed{24}$$

74	
	53

$$\boxed{21} + \boxed{53} = \boxed{74}$$

$$\boxed{53} + \boxed{21} = \boxed{74}$$

$$\boxed{74} - \boxed{21} = \boxed{53}$$

$$\boxed{74} - \boxed{52} = \boxed{21}$$

95	
63	

$$\boxed{63} + \boxed{32} = \boxed{95}$$

$$\boxed{32} + \boxed{63} = \boxed{95}$$

$$\boxed{95} - \boxed{63} = \boxed{32}$$

$$\boxed{95} - \boxed{32} = \boxed{63}$$

72	28

$$\boxed{72} + \boxed{28} = \boxed{100}$$

$$\boxed{28} + \boxed{72} = \boxed{100}$$

$$\boxed{100} - \boxed{72} = \boxed{28}$$

$$\boxed{100} - \boxed{28} = \boxed{72}$$